


Five butterflies, how many wings? How many spots?



Understanding

$$\begin{array}{r}
 4 \\
 4 \\
 4 \\
 4 \\
 + 4 \\
 \hline
 20
 \end{array}$$

Repeated addition



Arrays; rows and columns



4 groups, how many balloons?

Multiplication

factors

$$7 \times 3 = 21$$

product

6, 12, 18, 24, 30, 36, 42

Skip counting

X 2

4	8
6	12
7	14
8	

T Chart