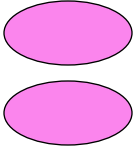

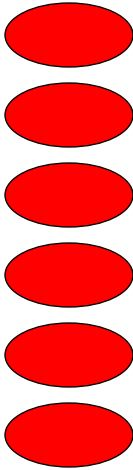
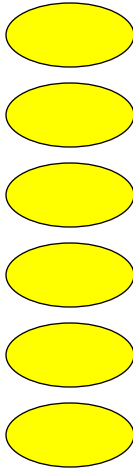
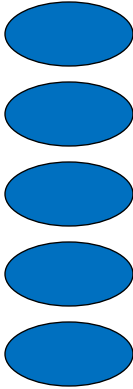
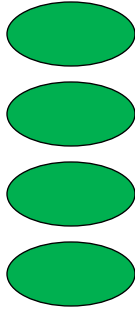




Favorite Jelly Beans



					
Pink	Purple	Red	Yellow	Blue	Green

Key: Each egg = ____ jelly beans



Favorite Jelly Beans



1. Which color jelly bean had the most votes? _____
2. Which color had the least votes? _____
3. If the key is 1 egg = 1 jelly bean, which three colors equals 10 jelly beans?

4. If the key is each egg equals 5 jelly beans, how many jelly beans are there in all?

5. If the key is each egg equals 6 jelly beans, how many more kids picked red as their favorite, than purple? _____
6. If the key is each egg equals 4 jelly beans, how many kids picked red and yellow?

7. If the key is each egg equals 3 jelly beans, which color had 12 votes?

8. If the key is each egg equals 9 jelly beans, which color had 45 votes?
9. Explain why it is important to know the key on a pictograph. _____
